

Multiplication Exercises Set 6

Maximum Expected Time Completion: 15 minutes

Instructions: Count the objects, double them, then write the multiplication sentence.

1.  +  = $2 \times 2 = \underline{\quad}$

2.  +  = $2 \times 3 = \underline{\quad}$








3.  +  = $2 \times 4 = \underline{\quad}$

4.  +  =

$2 \times 5 = \underline{\quad}$


5.  +  = $2 \times 2 = \underline{\quad}$

6.    +    = = _____

7.     +     = = _____

8.      +      =

= _____

9.   +   = = _____

10.    +    = = _____